

Name: _____

Date: _____

UNIT 2 • REASONING WITH LINEAR EQUATIONS AND INEQUALITIES

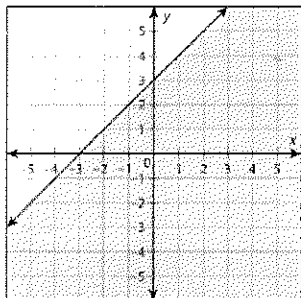
Lesson 8: Solving Linear Inequalities in Two Variables and Systems of Inequalities

Assessment

Progress Assessment

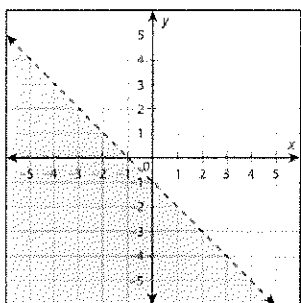
Circle the letter of the best answer.

1. Which inequality corresponds to this graph?



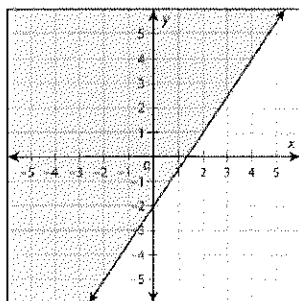
- a. $y \leq x - 3$
- b. $y \leq x + 3$
- c. $y > -x + 3$
- d. $y \geq x + 3$

2. Which inequality corresponds to this graph?



- a. $y < -x - 1$
- b. $y > x - 1$
- c. $y \leq -x - 1$
- d. $y \leq x + 2$

3. Which inequality corresponds to this graph?



- a. $-3x + 2y \leq 4$
- b. $3x + 2y \geq -4$
- c. $-3x - 2y \geq -4$
- d. $3x - 2y \leq 4$

continued

Name: _____

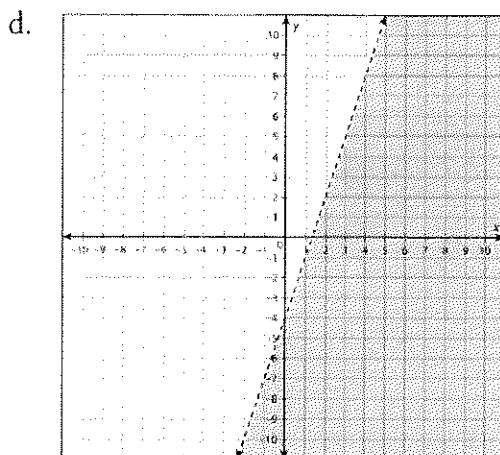
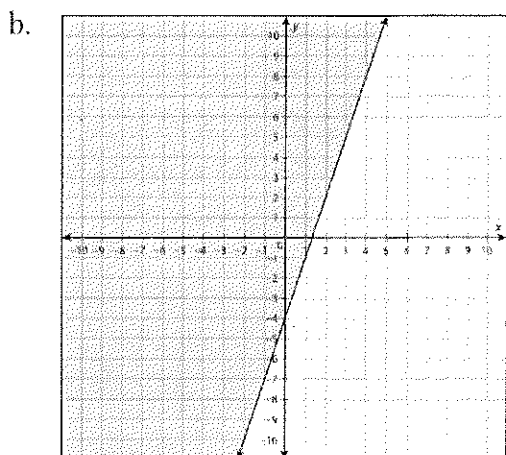
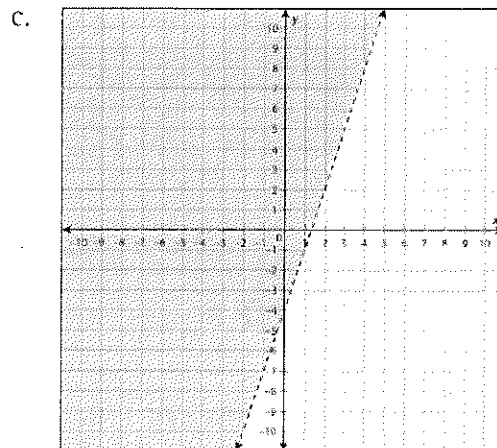
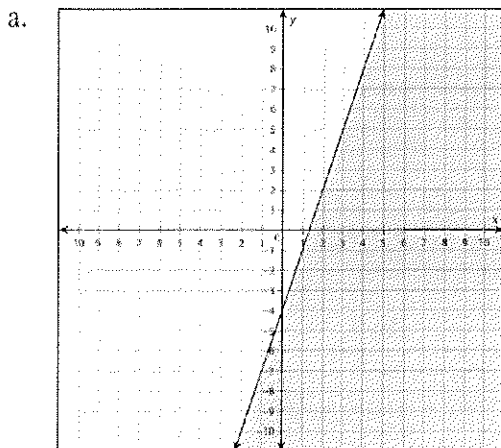
Date: _____

UNIT 2 • REASONING WITH LINEAR EQUATIONS AND INEQUALITIES

Lesson 8: Solving Linear Inequalities in Two Variables and Systems of Inequalities

Assessment

4. Which graph represents the solution to the inequality $3x - y > 4$?



continued

Name: _____

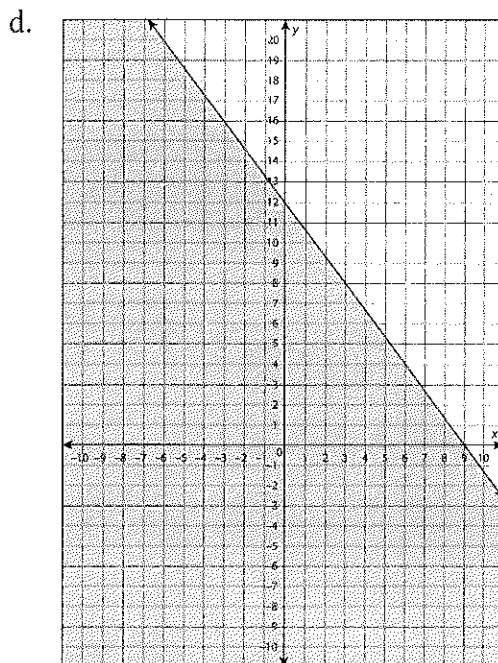
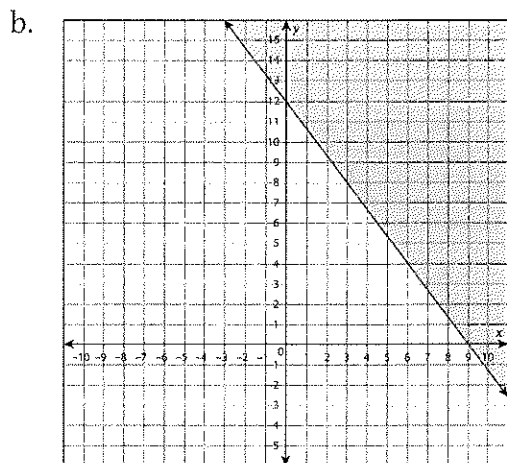
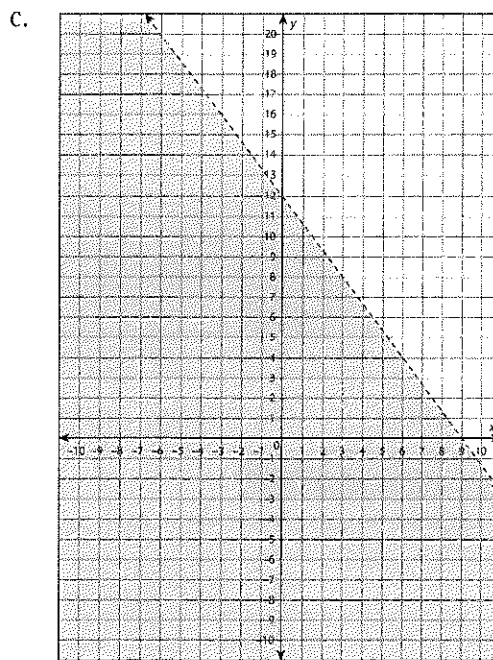
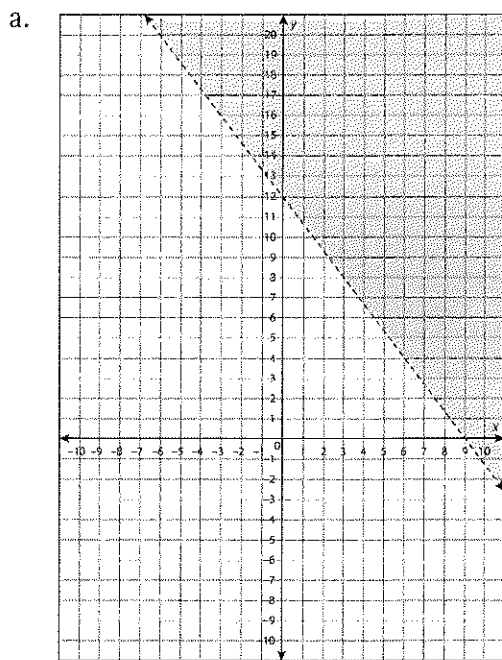
Date: _____

UNIT 2 • REASONING WITH LINEAR EQUATIONS AND INEQUALITIES

Lesson 8: Solving Linear Inequalities in Two Variables and Systems of Inequalities

Assessment

5. Which graph represents the solution to the inequality $4x + 3y \geq 36$?



continued

Name: _____

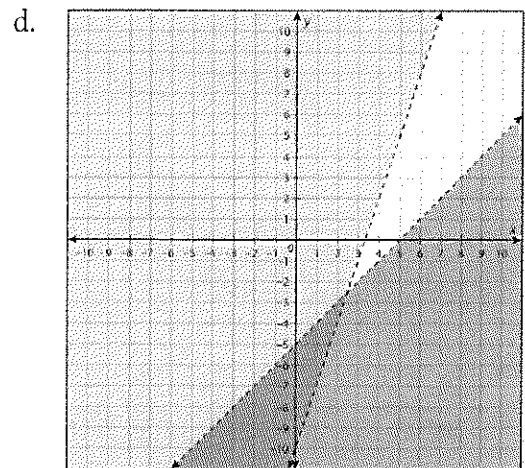
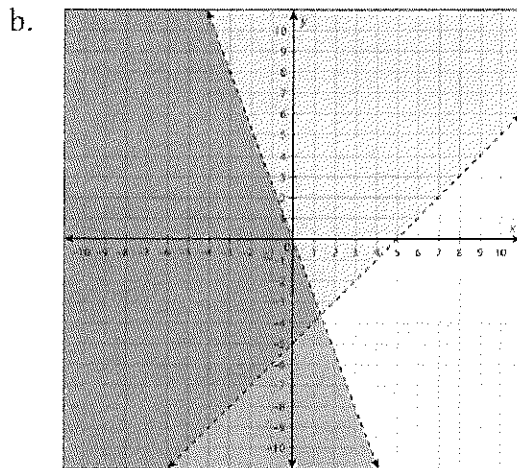
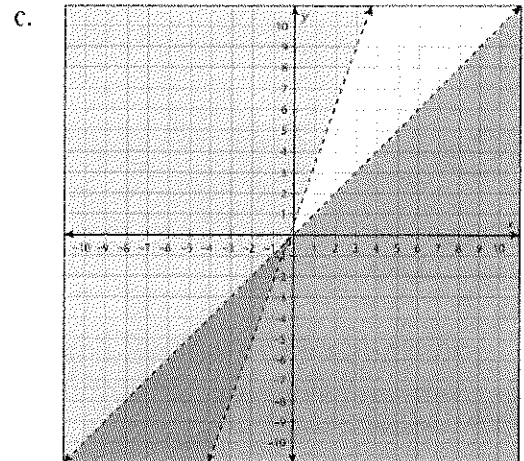
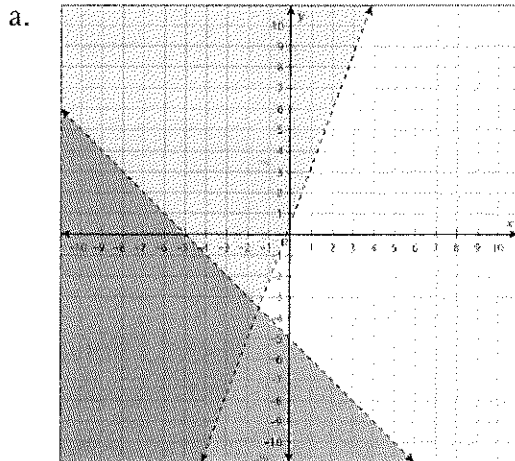
Date: _____

UNIT 2 • REASONING WITH LINEAR EQUATIONS AND INEQUALITIES

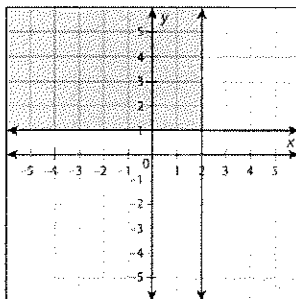
Lesson 8: Solving Linear Inequalities in Two Variables and Systems of Inequalities

Assessment

6. Which graph represents the solution to the system of inequalities $\begin{cases} y > 3x - 10 \\ y < x - 5 \end{cases}$?



7. Which system of inequalities corresponds to this graph?



a. $\begin{cases} x > 2 \\ y \leq 1 \end{cases}$

b. $\begin{cases} x \leq 2 \\ y > 1 \end{cases}$

c. $\begin{cases} x \geq 2 \\ y \geq 1 \end{cases}$

d. $\begin{cases} x \leq 2 \\ y \geq 1 \end{cases}$

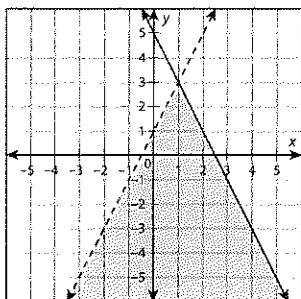
continued

Name: _____

Date: _____

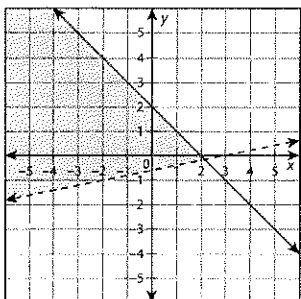
UNIT 2 • REASONING WITH LINEAR EQUATIONS AND INEQUALITIES**Lesson 8: Solving Linear Inequalities in Two Variables and Systems of Inequalities****Assessment**

8. Which system of inequalities corresponds to this graph?



- a. $\begin{cases} y \leq 2x + 1 \\ y > -2x + 5 \end{cases}$
- b. $\begin{cases} y > 2x + 1 \\ y > -2x + 5 \end{cases}$
- c. $\begin{cases} y > 2x + 1 \\ y \leq -2x + 5 \end{cases}$
- d. $\begin{cases} y < 2x + 1 \\ y \leq -2x + 5 \end{cases}$

9. Which system of inequalities corresponds to this graph?



- a. $\begin{cases} y < \frac{1}{5}x - \frac{1}{2} \\ y \geq -x + 2 \end{cases}$
- b. $\begin{cases} y > \frac{1}{5}x - \frac{1}{2} \\ y \leq -x + 2 \end{cases}$
- c. $\begin{cases} y > \frac{1}{5}x - \frac{1}{2} \\ y \geq -x + 2 \end{cases}$
- d. $\begin{cases} y < \frac{1}{5}x - \frac{1}{2} \\ y \leq -x + 2 \end{cases}$

continued

Name: _____

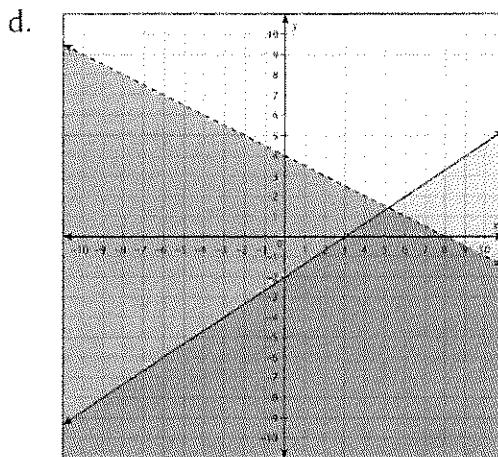
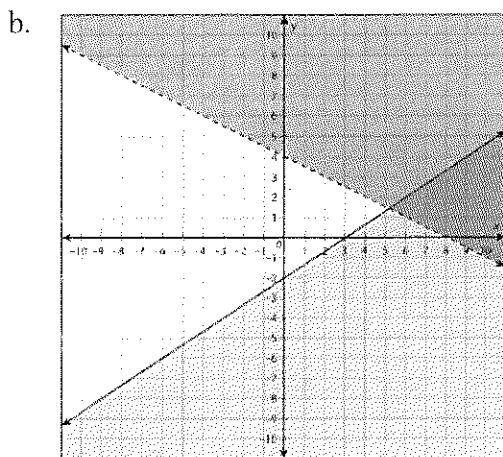
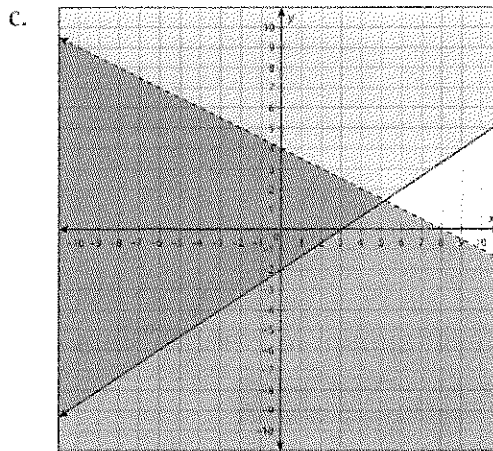
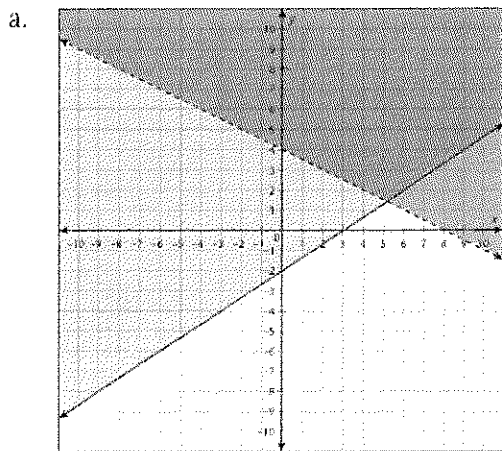
Date: _____

UNIT 2 • REASONING WITH LINEAR EQUATIONS AND INEQUALITIES

Lesson 8: Solving Linear Inequalities in Two Variables and Systems of Inequalities

Assessment

10. Which graph represents the solution to the system of inequalities $\begin{cases} 3x + 6y > 24 \\ 2x - 3y \leq 6 \end{cases}$?



continued

Name: _____

Date: _____

UNIT 2 • REASONING WITH LINEAR EQUATIONS AND INEQUALITIES

Lesson 3: Representing Constraints

Assessment

Progress Assessment

Circle the letter of the best answer.

1. Which point is a solution to the system of inequalities $\begin{cases} y \geq -7x + 3 \\ y \geq \frac{2}{3}x - 3 \\ y \leq -x + 7 \end{cases}$?

- a. (2, 6)
- b. (-1, 8)
- c. (0, -3)
- d. (1, 4)

2. Given the system of inequalities in problem 1, which point is NOT a solution?

- a. (3, -1)
- b. (1, -3)
- c. (5, 1)
- d. (2, 4)

3. Given the inequalities $y < 2x - 6$ and $y \leq 4x + 5$, the point (2, 3) is:

- a. a solution to both inequalities
- b. a solution to $y < 2x - 6$ only
- c. a solution to $y \leq 4x + 5$ only
- d. not a solution of either of the inequalities

4. An online company is advertising a subscription service for downloads of e-books. The monthly fee is \$6.50, plus \$1.99 for each downloaded book. You can afford to spend no more than \$15.00 each month on e-books. What is the maximum number of e-books you can download?

- a. 8
- b. 7
- c. 5
- d. 4

5. Used video games are advertised for \$12.00 and new video games are advertised for \$20.00. You have a gift card for \$100.00. Which of the following game combinations can you NOT buy?

- a. 7 used video games and 1 new video game
- b. 4 used video games and 2 new video games
- c. 1 used video game and 4 new video games
- d. 0 used video games and 5 new video games

continued